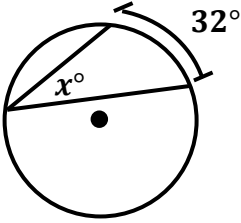
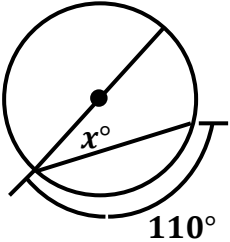
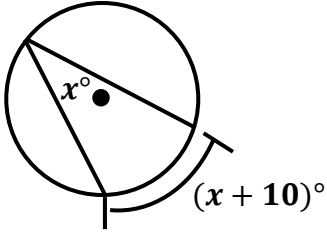
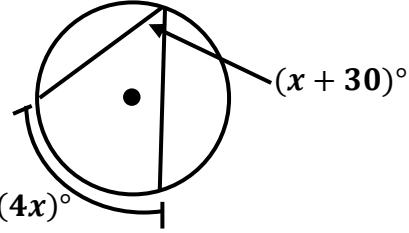
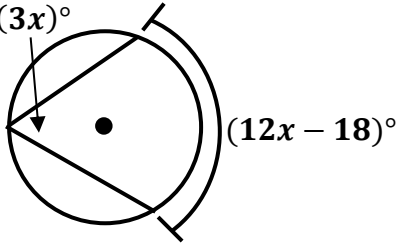
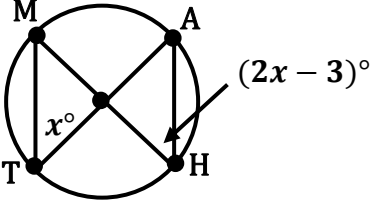


10.4 – INSCRIBED ANGLES

Find the indicated value(s).

<p>1. $x =$ _____</p>	
<p>2. $x =$ _____</p>	
<p>3. $x =$ _____</p>	
<p>4. $x =$ _____</p>	
<p>5. $x =$ _____</p>	
<p>6. $x =$ _____</p>	

7. $x =$ _____

$m\widehat{MA} =$ _____

8. $x =$ _____

9. $x =$ _____

10. $x =$ _____

11. $x =$ _____

12. $m\angle ABC =$ _____

$m\angle BCD =$ _____

$m\angle BAD =$ _____